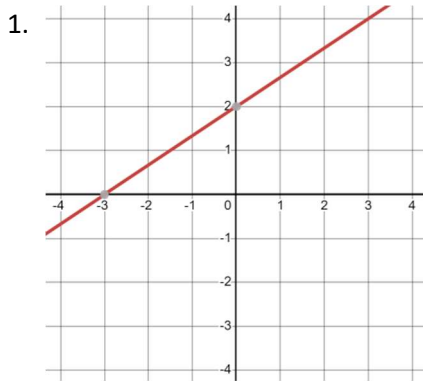


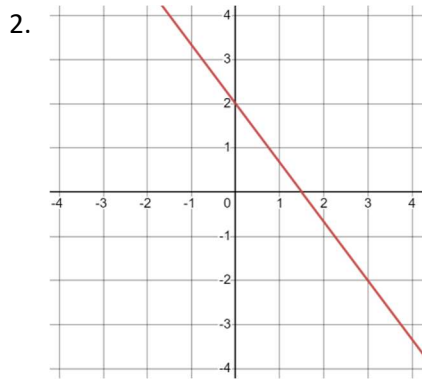
Geometry – 3.5 Worksheet #1

Name: _____ Hour: _____

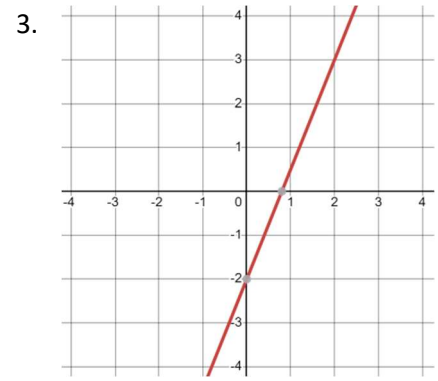
Find the slope of the following graphed lines.



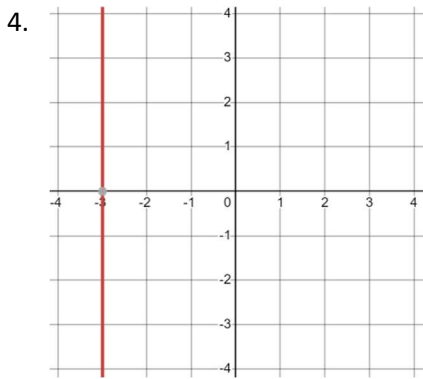
Slope: _____



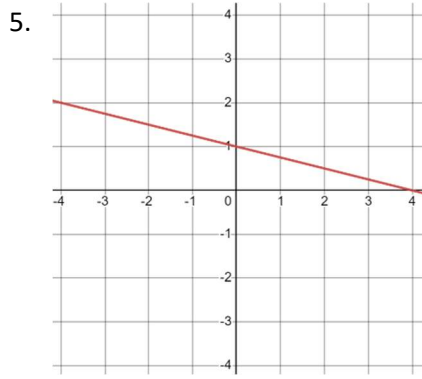
Slope: _____



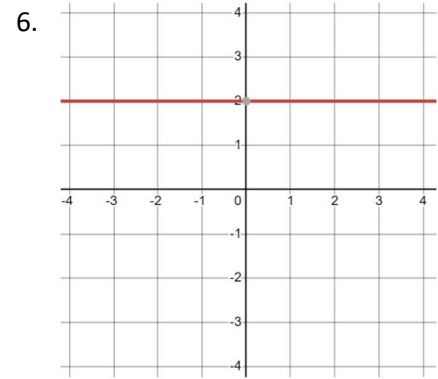
Slope: _____



Slope: _____



Slope: _____



Slope: _____

Find the slope of the lines that pass through the given points.

7. $(-3, 7), (0, -6)$

8. $(2, -4), (-10, 8)$

9. $(7, -5), (10, 5)$

10. $(9, -6), (-1, -6)$

11. $(1, 0), (-3, -11)$

12. $(13, 4), (-6, 4)$